

Thursday 25th February - Maths

Watch the online Youtube video then have a go at the tasks below:



1. $366 \div 6 =$

2. $427 \div 7 =$

3. $546 \div 6 =$


4. $735 \div 7 =$

5. $672 \div 6 =$


6. $469 \div 7 =$




11. Grandma Jones had £378 which she shared equally between her 7 grandchildren. How much money did each grandchild receive?



12. 1134 train passengers are given tickets to sit in 9 different carriages. How many passengers are in each carriage?





Mastery: To explain mistakes in calculations using short division

Jamie is using short division to divide 3-digit numbers.

He has done these calculations but he isn't sure if they are right. You need to check them for him.

You will need to **fully explain any mistakes** you find so Jamie can know what he will need to do next time.

$$\begin{array}{r} \text{H T O} \\ 073 \\ 6 \overline{) 378} \end{array}$$

$$378 \div 6 = 73$$

$$\begin{array}{r} \text{H T O} \\ 11 \\ 5 \overline{) 505} \end{array}$$

$$505 \div 5 = 11$$

$$\begin{array}{r} \text{H T O} \\ 168 \\ 4 \overline{) 672} \end{array}$$

$$672 \div 4 = 168$$

$$\begin{array}{r} \text{H T O} \\ 279 \\ 3 \overline{) 738} \end{array}$$

$$738 \div 3 = 279$$