
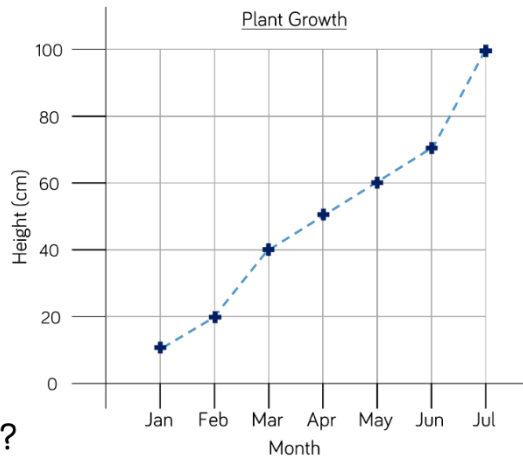



Thursday 04.03.21

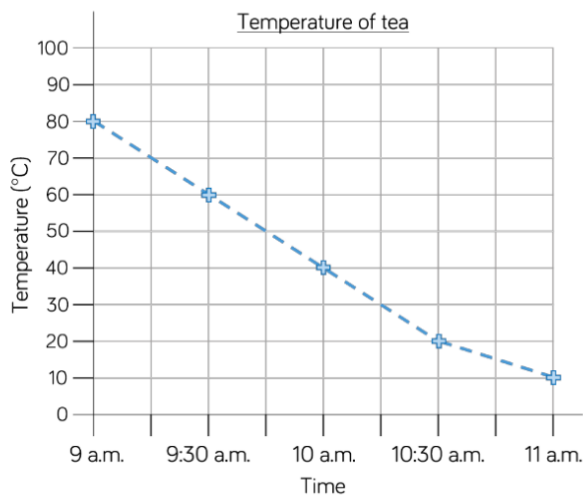
Watch the YouTube video and complete the following activities

 The graph shows the growth of a plant over 6 months.

- How tall was the plant when it was measured in May?
- In what month did the plant first reach 50 cm?
- How many centimetres did the plant grow between March and July?
- What was the difference between the height of the plant in February and the height of the plant in April?



 Eva measured the temperature of a cup of tea every 30 minutes for 2 hours. The graph shows Eva's results.



Eva says,



In the first 45 minutes the temperature of the tea had dropped by 20 degrees.

Do you agree with Eva?
Explain why.



Write a story to match the graph.

