






Monday 01.03.21

Watch the YouTube video and complete the following activities



Represent the data in each table as a bar chart.

Team	Number of house points
Sycamore	
Oak	
Beech	
Ash	

 = 20 points

Day	Number of tickets sold
Monday	55
Tuesday	30
Wednesday	45
Thursday	75
Friday	85

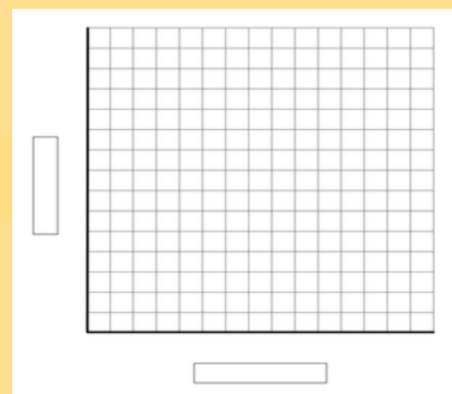


Produce your own, showing your family/friends favourite sport. You must ask at least 6 people.

1. Use a tally chart to collect the information
2. Present it in a bar chart



	Tally	Frequency





Here is some information about the number of tickets sold for a concert.

Day	Number of tickets sold
Monday	55
Tuesday	30
Wednesday	45
Thursday	75
Friday	85

Jack starts to create a bar chart to represent the number of concert tickets sold during the week.



What advice would you give Jack about the scale he has chosen?

What would be a better scale to use?

Is there anything else missing from the bar chart?