



Year 1 Week 5 Wednesday 3rd 2021

●

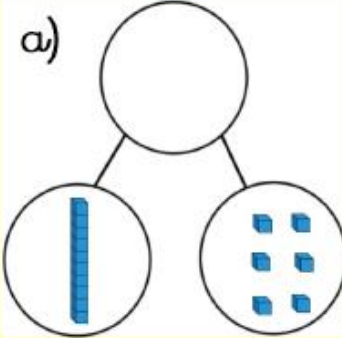
Tens	Ones
	

There are 3 tens and 5 ones.
3 tens + 5 ones = 35

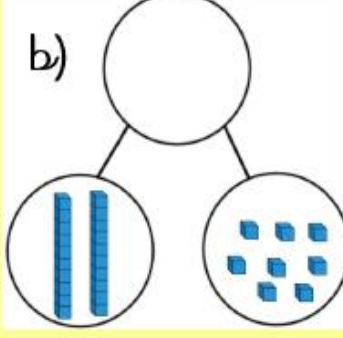
Which numbers are shown below?

How many tens and ones?



a)




b)





c)

tens	ones
	

d)

tens	ones
	

e)

tens	ones
	

● Match up the numbers with the correct image

35

There are tens and ones.
 tens and ones =

22

There are tens and ones.
 tens and ones =

16

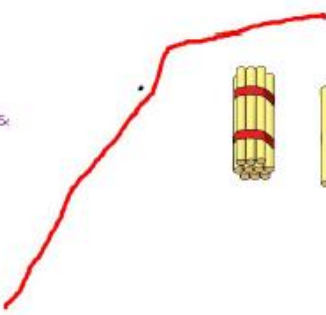
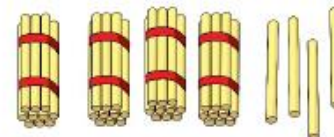
There is 1 ten and 6 ones.
1 tens and 6 ones = 16

19

There are tens and ones.
 tens and ones =

44

There are tens and ones.
 tens and ones =

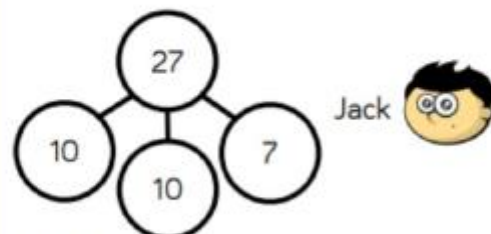
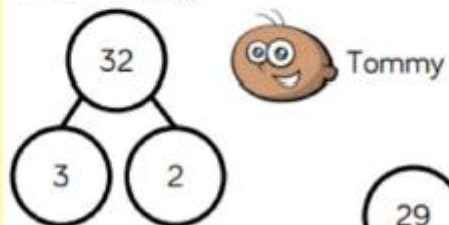


Match the pictures and words.

- Four tens and three ones
- Two tens and five ones
- Three tens and four ones
- Three ones and five tens

How many?

The children are completing the part whole models.



Are they correct?
Explain why.