




Monday 01.02.21


Watch the YouTube video and complete the following activities

 This is a square sticky note. 

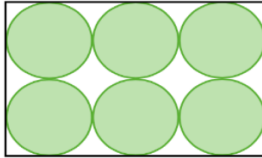
Estimate how many sticky notes you need to make these shapes?



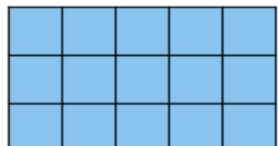
Now make the shapes using sticky notes.  
Which ones cover the largest amount of surface? Which ones cover the least amount of surface?

 Teddy and Eva are measuring the area of the same rectangle.

Teddy uses circles to find the area.





Eva uses squares to find the area.

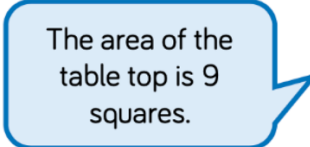



Whose method do you think is more reliable?  
Explain why.

Two children have measured the top of their desk. They used different sized squares.

   
Dora

The area of the table top is 6 squares.

   
Alex

The area of the table top is 9 squares.

Who used the largest squares?  
How do you know?