



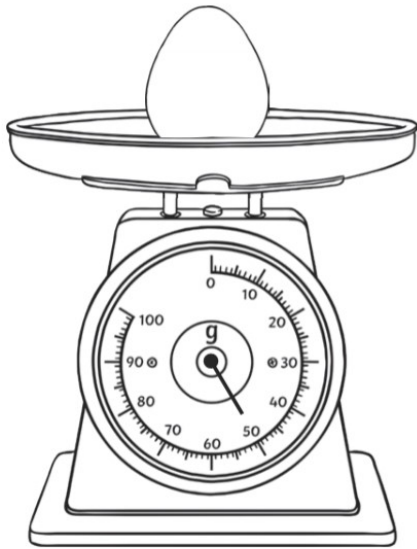
_____ g



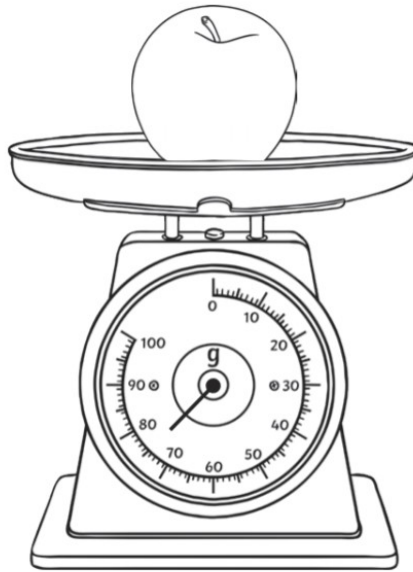
_____ g



_____ g



_____ g

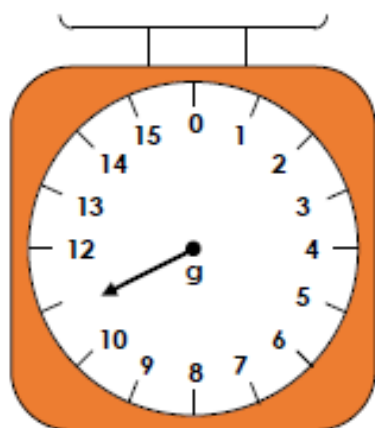


_____ g



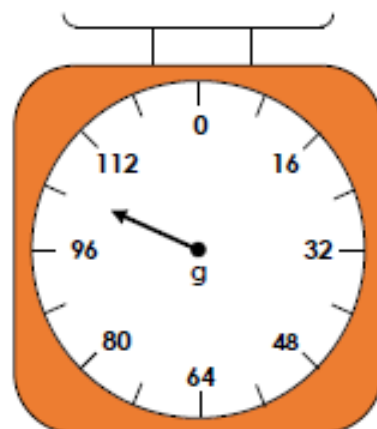
_____ g

1a. What mass is the arrow showing on this scale?



VF

4a. What mass is the arrow showing on this scale?



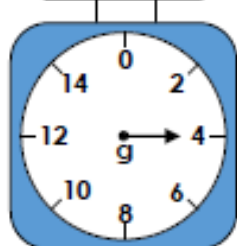
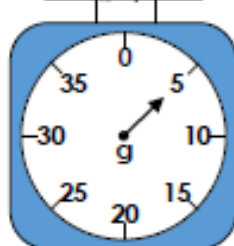
VF

2a. Which object is the heaviest?
mais pesado?

A



B



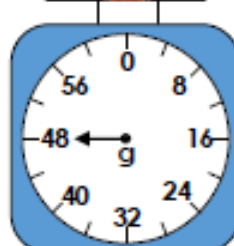
VF

5a. Which object is the heaviest?
mais pesado?

A



B



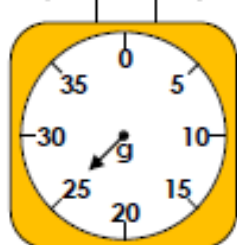
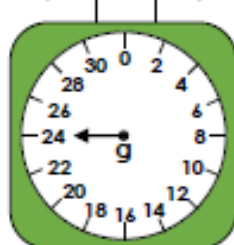
VF

3a. How much does each object weigh?
Quanto é que eles pesam?

A



B



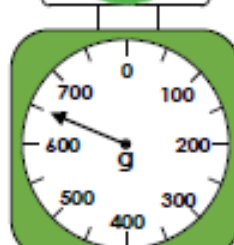
VF

6a. How much does each object weigh?
Quanto é que eles pesam?

A



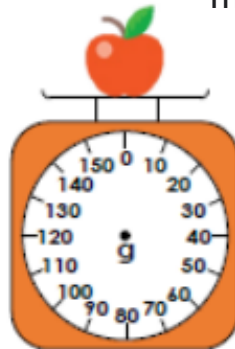

B



VF

1a. If two cupcakes weigh the same as one apple, draw an arrow on the scale to show the weight of the apple.

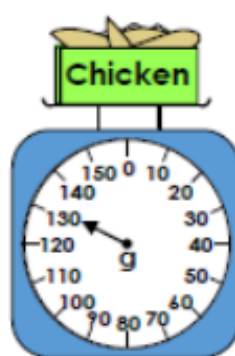
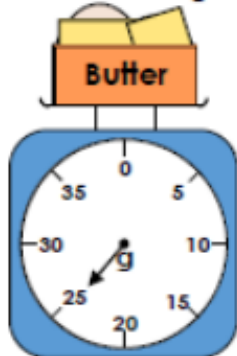
se 2 cupcakes pesam o mesmo que 1 maçã, mostre o peso de 1 maçã



PS

2a. Matt is making a pie. He needs 30g of butter and 150g of chicken.

Mat está fazendo uma torta. Ele precisa de 30g de manteiga e 150g de frango. De quanto mais manteiga e frango ele precisa?

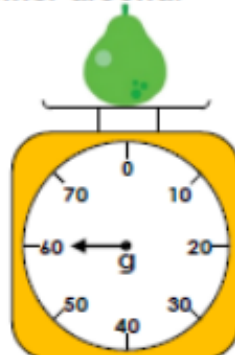
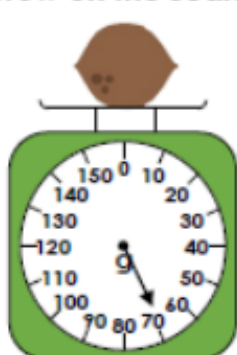


How much more of each ingredient does he need?



PS

3a. Hafsa is weighing different items. She says the pear is heavier because the arrow on the scale is further around.



Is she correct? Explain how you know.



R

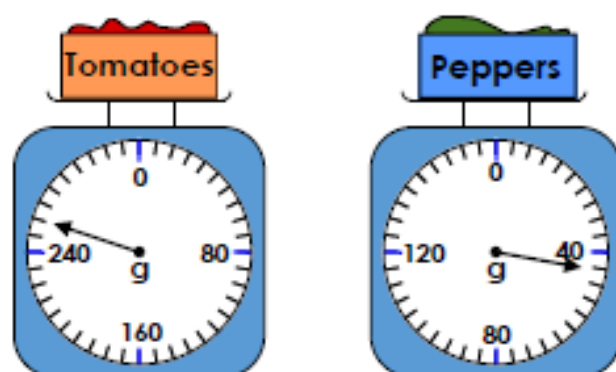
Hafsa diz que a pêra é mais pesada. Ela está certa?

- 1 If two lemons weigh the same as one orange, draw an arrow on the scale to show the weight of the orange.



PS

- 2 Ruth is making a sauce. She needs 280g of tomatoes and 60g of peppers.



How much more of each ingredient does she need?



PS

- 3 Alice is weighing different items. She says the pears are heavier because the arrow on the scale is further away from zero.



Is she correct? Explain how you know.



R